



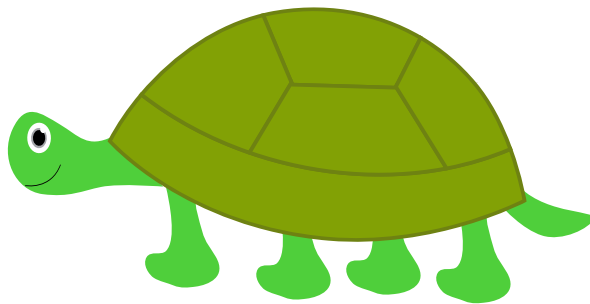
NAME _____ DATE _____

UNDERSTAND CONCEPTS ABOUT THE RULER



Apply concepts to create unit rulers, measure lengths using unit rulers.

Find the length of each object using one centimeter cube. Mark the end point of each centimeter cube as you measure.

1) The picture of the turtle is about ___ centimeter long.



2) The picture of the sandwich is about ___ centimeter long.



3) The picture of the fish is about ___ centimeter long.

