



NAME _____ DATE _____

UNDERSTAND CONCEPTS ABOUT THE RULER

Connect measurement with physical units by using multiple copies of the same physical unit to measure.

1) The length of Marissa's loaf of bread is 56 centimeters. She cut off of 32 centimeters of bread. What is the length of what she has left?

Solution:


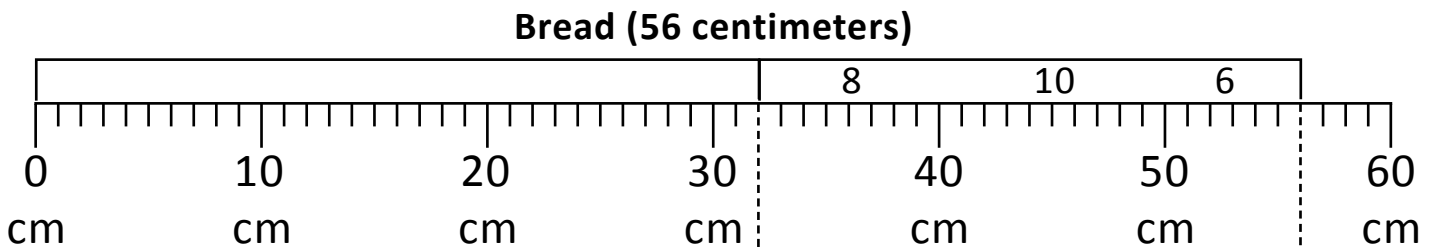
The length of Marissa's loaf of bread is ___ centimeters.

She cut off of ___ centimeters.


Length of bread what she has left = ___ - ___.

By arrow way:

$$56 \xrightarrow{-10} \underline{\quad} \xrightarrow{-10} \underline{\quad} \xrightarrow{-10} \underline{\quad} \xrightarrow{-2} \underline{\quad}$$



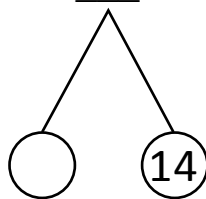
Cut off



Left

Length of bread what she has left.

$$8 + 10 + 6 = 8 + \underline{\quad}$$



$$= \underline{\quad} + 14.$$

$$= \underline{\quad} \text{ centimeters.}$$