



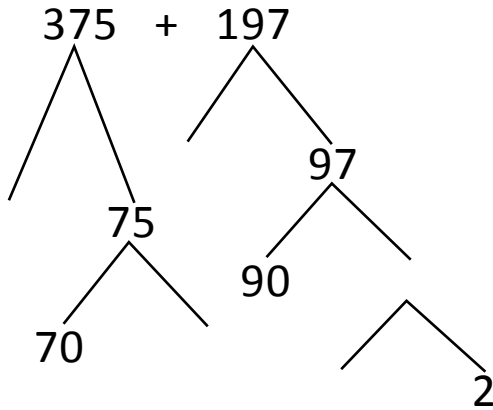
NAME _____

DATE _____

ADDITION OR SUBTRACTION

Solve the following problems using the vertical method your place value chart and number disks. Bundle a ten or hundred when necessary.

Number bond:



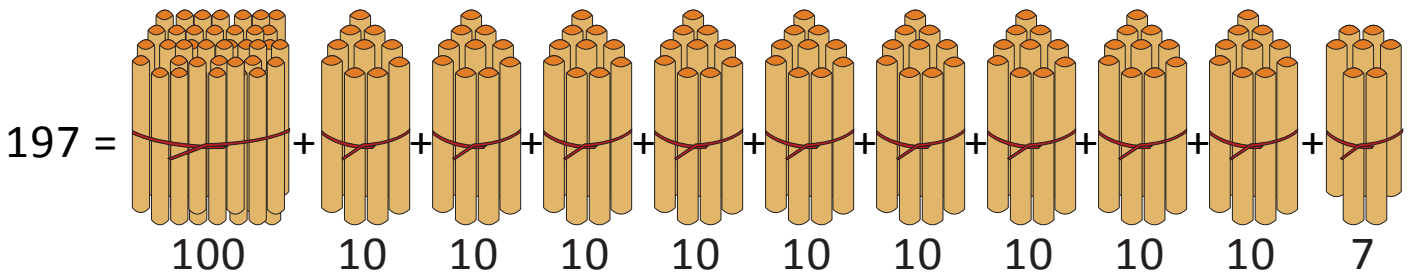
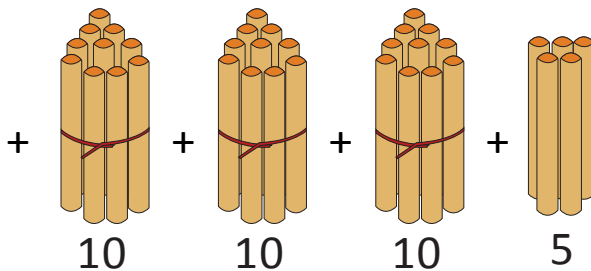
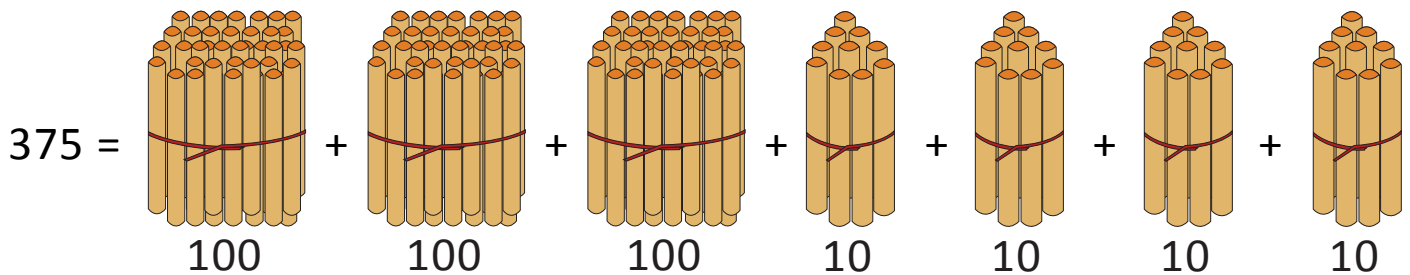
$$= 300 + 100 + 70 + 90 + 5 + 5 + 2$$

$$= \underline{\quad} + 70 + \underline{\quad} + 2$$

$$= 500 + \underline{\quad} + 2 = \underline{\quad}$$

(OR)

Bundle 1 or 10 or 100:



$$375 + 197 = \underline{\quad} \text{ hundreds} + 10 \text{ tens} \underline{\quad} \text{ tens} + 5 \text{ ones} + 7 \text{ ones.}$$

$$= \underline{\quad} \text{ hundreds} + \underline{\quad} \text{ tens} + 2 \text{ ones} = \underline{\quad}.$$

(10 ones = 1 ten)

(10 tens = 1 hundred)