

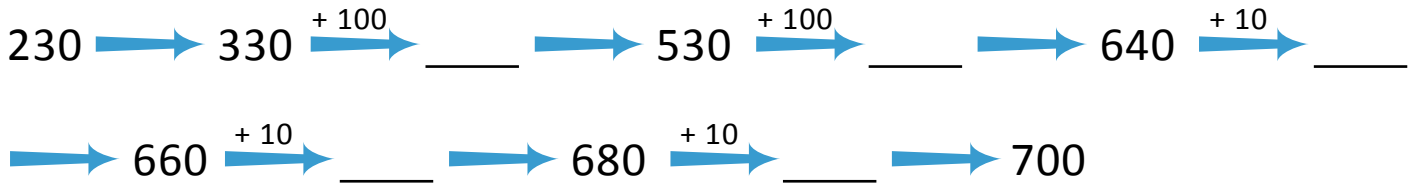


NAME _____ DATE _____

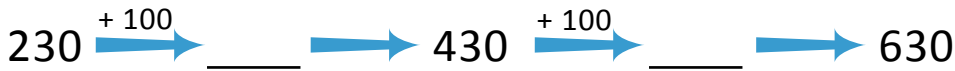
ADDITION OR SUBTRACTION

Solve each using the arrow way.

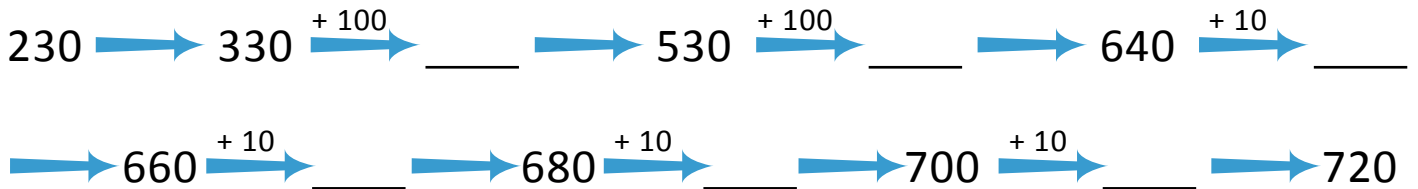
1) $230 + 470 = \underline{\hspace{2cm}}$.



2) $230 + 400 = \underline{\hspace{2cm}}$.



3) $230 + 490 = \underline{\hspace{2cm}}$.



4) $320 + 200 = \underline{\hspace{2cm}}$.



5) $280 + 320 = \underline{\hspace{2cm}}$.

