



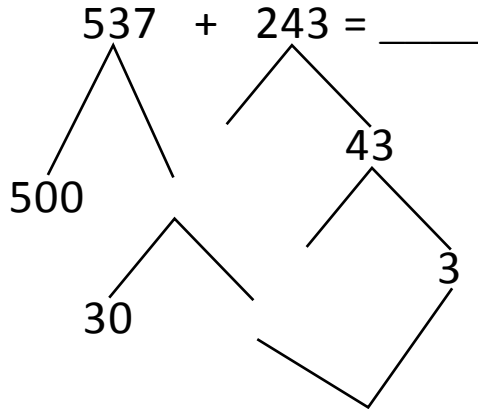
NAME \_\_\_\_\_

DATE \_\_\_\_\_

## ADDITION OR SUBTRACTION

Solve the following problems using the vertical method your place value chart and number disks. Bundle a ten or hundred when necessary.

Number bond:



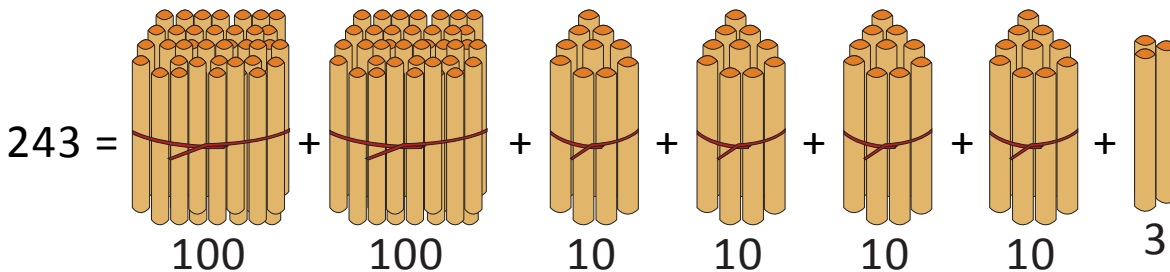
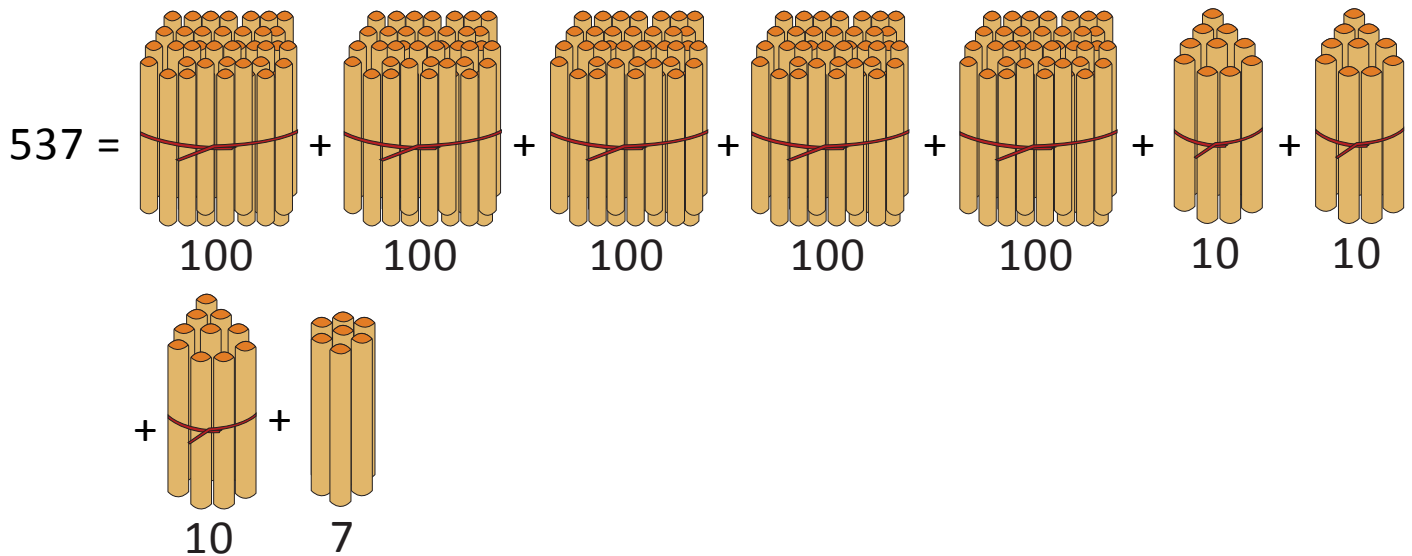
$$= 500 + 200 + 30 + 40 + 10$$

$$= \underline{\quad} + \underline{\quad} + \underline{\quad}$$

$$= \underline{\quad}$$

(OR)

Bundle 1 or 10 or 100:



$$537 + 243 = \underline{\quad} \text{ hundreds} + \underline{\quad} \text{ tens} + \underline{\quad} \text{ ones.} \quad (10 \text{ ones} = 1 \text{ tens})$$

$$= \underline{\quad} \text{ hundreds} + \underline{\quad} \text{ tens} = \underline{\quad}.$$