



NAME _____

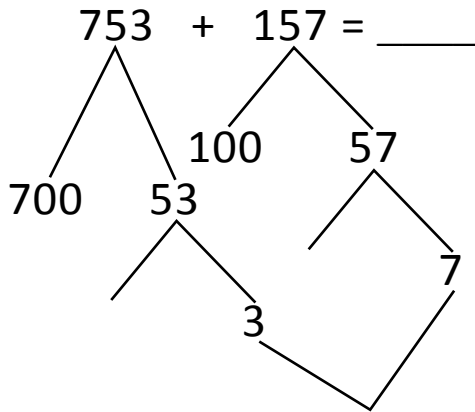
DATE _____

ADDITION OR SUBTRACTION

Solve the following problems using the vertical method your place value chart and number disks. Bundle a ten or hundred when necessary.

(OR)

Number bond:

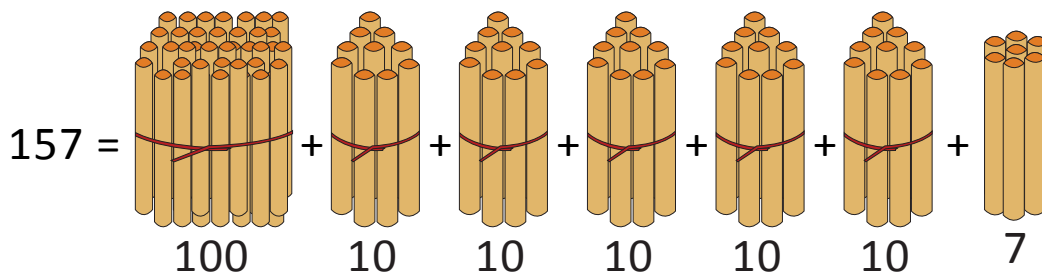
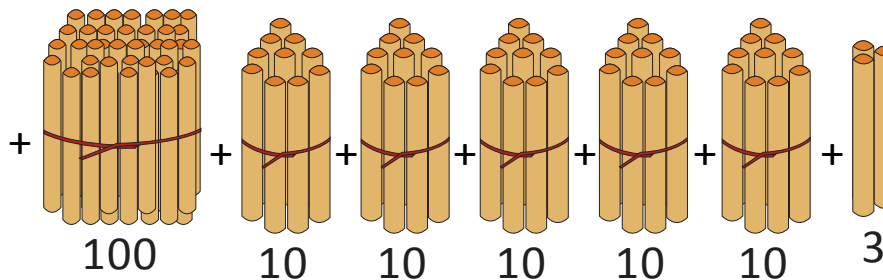
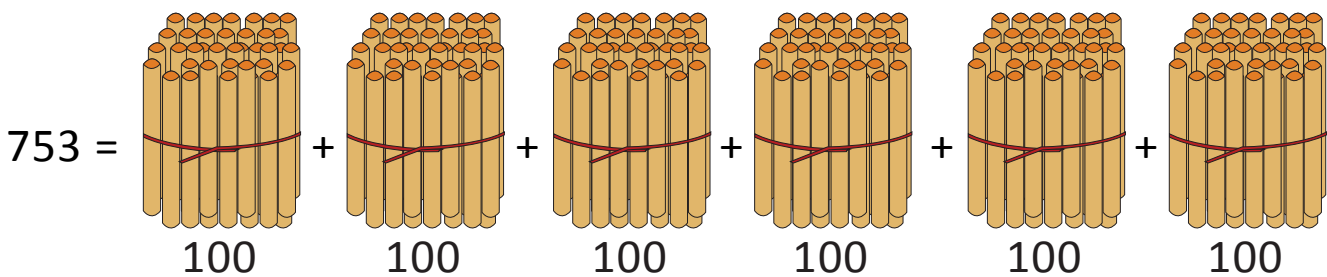


$$= \underline{\quad} + \underline{\quad} + \underline{\quad} + \underline{\quad} + \underline{\quad}$$

$$= 910$$

(OR)

Bundle 1 or 10 or 100:



$$753 + 157 = 8 \text{ hundreds} + 10 \text{ tens} + 10 \text{ ones.}$$

$$= \underline{\quad} \text{ hundreds} + \underline{\quad} \text{ tens} = \underline{\quad} + \underline{\quad} = 910.$$