





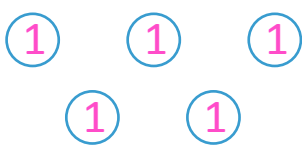
NAME \_\_\_\_\_

DATE \_\_\_\_\_

## ADDITION OR SUBTRACTION

Solve each problem with a written strategy such as a tape diagram, a number bond, the arrow way, the vertical method or chips on place value chart.

The vertical method: (Using disks on the place value chart)

| Numbers   | Hundreds  | Tens   | Ones  |
|-----------|---|--|---|
| 865       |  |  |  |
| 865 - 300 |   |  |   |

$$865 - 300 = \underline{\quad}$$

Using chips on the place value chart:

| Numbers   | H               | T           | O         |
|-----------|-----------------|-------------|-----------|
| 865       | ● ● ● ● ● ● ● ● | ● ● ● ● ● ● | ● ● ● ● ● |
| 865 - 300 |                 |             |           |

$$865 - 300 = \underline{\quad}$$