



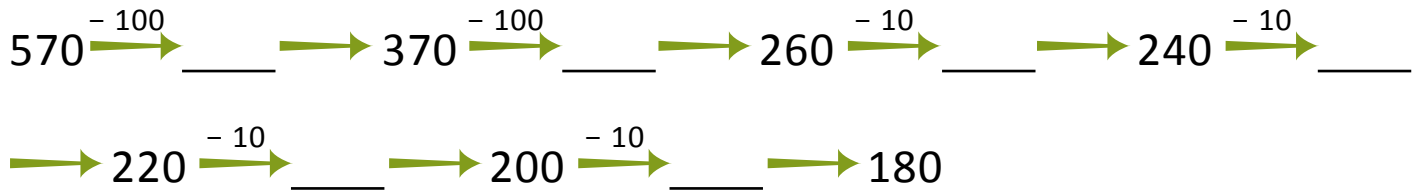
NAME \_\_\_\_\_

DATE \_\_\_\_\_

## ADDITION OR SUBTRACTION

Solve each using the arrow way.

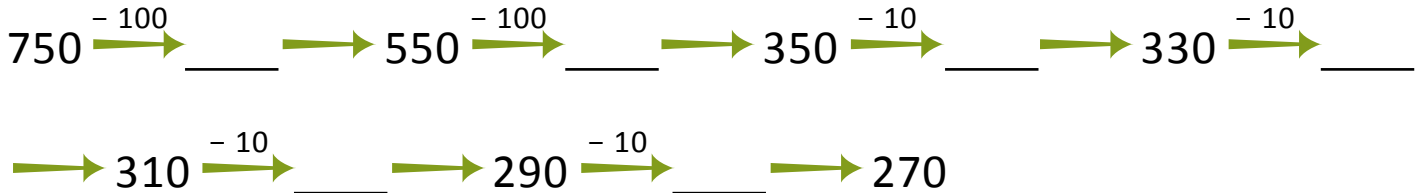
1)  $570 - 390 = \underline{\hspace{2cm}}$ .



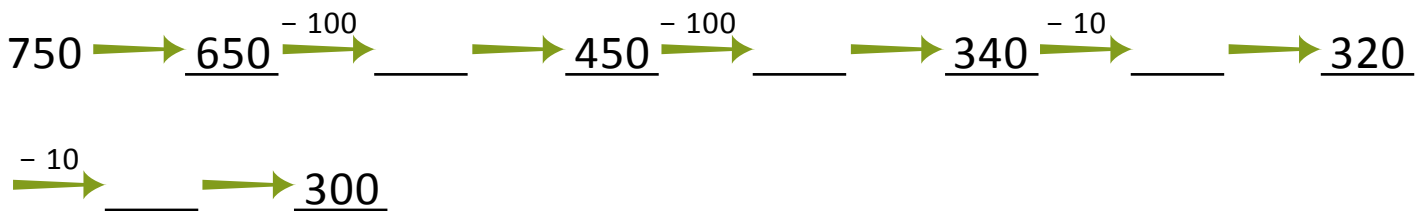
2)  $750 - 400 = \underline{\hspace{2cm}}$ .



3)  $750 - 480 = \underline{\hspace{2cm}}$ .



4)  $750 - 450 = \underline{\hspace{2cm}}$ .



5)  $940 - 330 = \underline{\hspace{2cm}}$ .

