



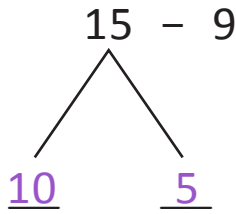
NAME _____

DATE _____

SOLVING PROBLEMS ON NUMBER BONDS

Addition or subtraction by using number bonds.

Example:

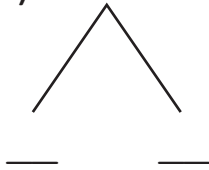


$$10 - 9 = \underline{1}$$

$$1 + 5 = \underline{6}$$

$$15 - 9 = \underline{6}$$

1) $11 - 8$

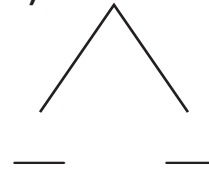


$$10 - 8 = \underline{\quad}$$

$$2 + 1 = \underline{\quad}$$

$$11 - 8 = \underline{\quad}$$

3) $12 - 7$



$$10 - 7 = \underline{\quad}$$

$$3 + 2 = \underline{\quad}$$

$$12 - 7 = \underline{\quad}$$

2) $14 - 6$



$$10 - 6 = \underline{\quad}$$

$$4 + 4 = \underline{\quad}$$

$$14 - 6 = \underline{\quad}$$

4) $16 - 7$



$$10 - 7 = \underline{\quad}$$

$$3 + 6 = \underline{\quad}$$

$$16 - 7 = \underline{\quad}$$