



NAME _____


DATE _____

COUNTING THE OBJECTS


Counting objects by observing rows and columns.

1) Use the array to answer the questions below.


a) ___ rows of ___ = ___.



b) ___ columns of ___ = ___.



c) ___ + ___ + ___ + ___ = ___.



d) Add 1 more row. How many stars are there now? ___.

e) Add 1 more column to the new array you made in 3 (d). How many squares are there now? ___.

2) Use the array of smiley faces to answer the questions below?

a) ___ rows of ___ = ___.



b) ___ columns of ___ = ___.



c) ___ + ___ + ___ + ___ + ___ = ___.



d) Add 1 more row. How many smiley faces are there now? ___.

e) Add 1 more column to the new array you made in 2 (d). How many smiley faces are there now? ___.