






NAME _____

DATE _____

FOUNDATION OF MULTIPLICATION/DIVISION

Use math drawings to represent equal groups and relate to repeated addition.

1) Draw one more equal group. Then write an addition sentence to match.



Solution:

$$_ + _ + _ + _ = _.$$

$$4 \text{ groups of } _ = _.$$

2) Draw two group of three stars. Then write an addition sentence to match.

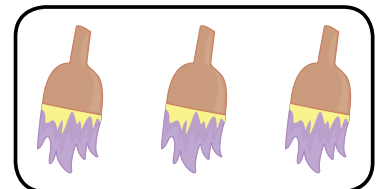
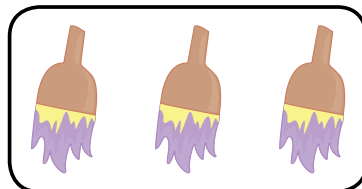
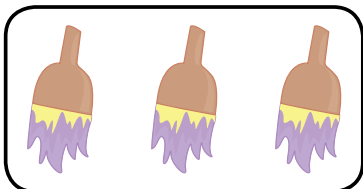


Solution:

$$_ + _ = _.$$

$$2 \text{ groups of } _ = _.$$

3) Write an addition sentence to show the number of objects in each group. Then find the total.



Solution:

$$_ + _ + _ = _.$$

$$3 \text{ groups of } _ = _.$$