



NAME _____

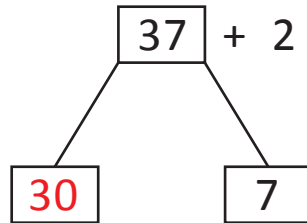
DATE _____

NUMBER BONDS

Use the number bond and add the sums.

Example:

37 and 2 make



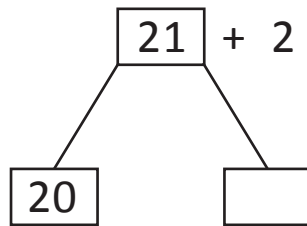
$$2 + \underline{7} = 9$$

$$30 + \underline{9} = 39$$

Do the following problems by using number bonds same as above.

1)

21 and 2 make

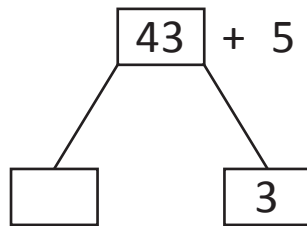


$$\underline{\quad} + 1 = \underline{\quad}$$

$$20 + \underline{\quad} = \underline{\quad}$$

2)

43 and 5 make

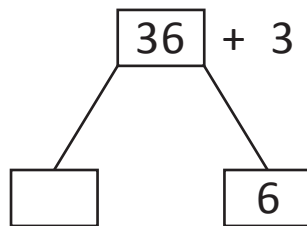


$$5 + \underline{\quad} = 8$$

$$40 + \underline{\quad} = 48$$

3)

36 and 3 make

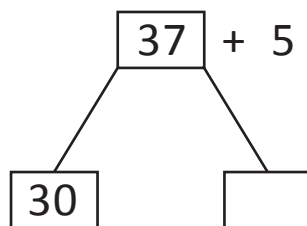


$$3 + \underline{\quad} = 9$$

$$30 + \underline{\quad} = 39$$

4)

37 and 5 make



$$5 + \underline{\quad} = 12$$

$$30 + \underline{\quad} = 42$$