



NAME _____

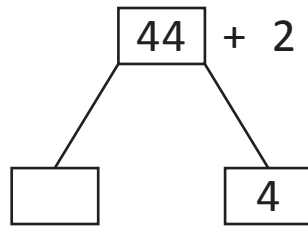
DATE _____

NUMBER BONDS

Use the number bond and add the sums.

1)

44 and 2 make

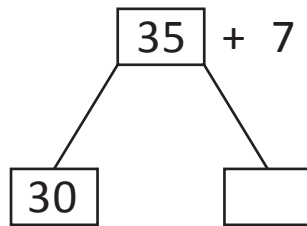


$$2 + \underline{\quad} = 6$$

$$40 + \underline{\quad} = 46$$

2)

35 and 7 make

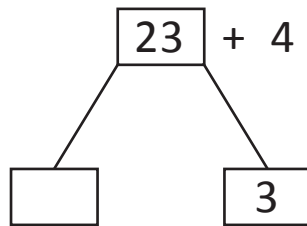


$$7 + \underline{\quad} = 12$$

$$30 + \underline{\quad} = 42$$

3)

23 and 4 make

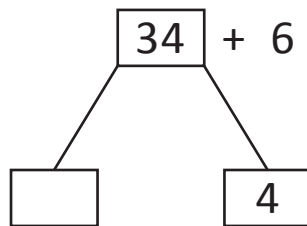


$$4 + \underline{\quad} = 7$$

$$20 + \underline{\quad} = 27$$

4)

34 and 6 make

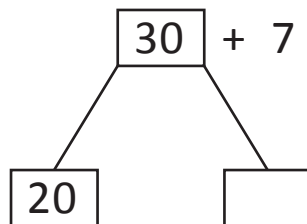


$$6 + \underline{\quad} = 10$$

$$30 + \underline{\quad} = 40$$

5)

30 and 7 make



$$7 + \underline{\quad} = 17$$

$$17 + \underline{\quad} = 37$$