



NAME _____ DATE _____

ARRANGEMENTS OF ROWS AND COLUMNS

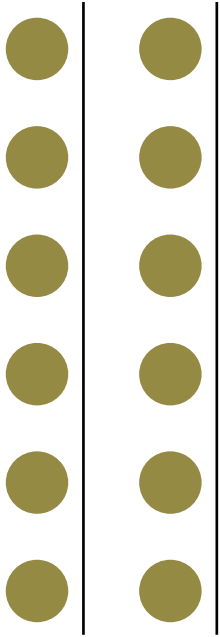
Compose arrays from rows and columns and count to find the total using objects.

Example:

Draw the circles and stars as columns of 2 as you like.


Solution:

Circles



2 columns of 6 = 12


Stars




2 columns of 5 = 10

1) Draw the smiley faces and triangles as columns of 3 as you like.

Solution:



___ columns of 5 = ___



___ columns of 4 = ___