



NAME _____

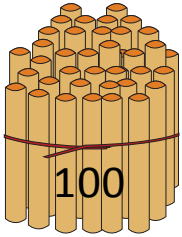
DATE _____

BUNDLE AND COUNT

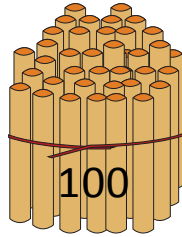
These are bundles of hundreds tens and ones.

Example:

Draw to show how you would count to 200?



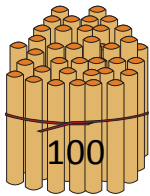
100



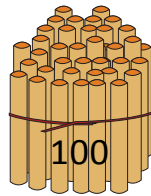
100

 $= 200$

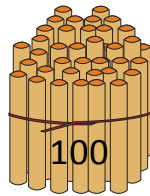
1. How you would count to 300?



100



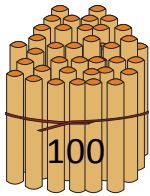
100



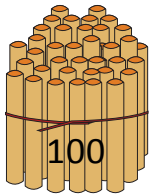
100

 $= \underline{\quad}$

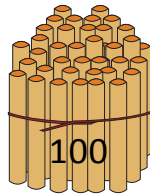
2. How you would count to 500?



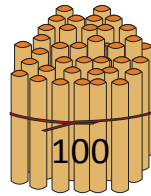
100



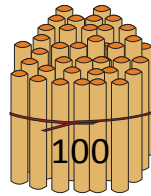
100



100



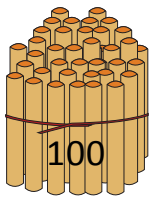
100



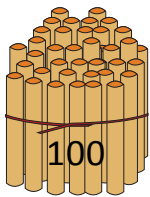
100

 $= \underline{\quad}$

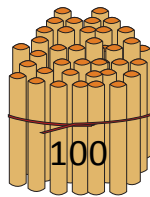
3. How you would count to 700?



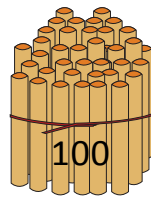
100



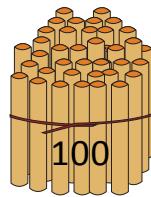
100



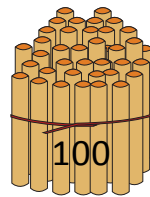
100



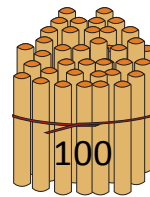
100



100



100



100

 $= \underline{\quad}$