



NAME _____

DATE _____

BUNDLE AND COUNT


Counting made easy for the given numbers.

1. Show a way to count from 334 to 800 using ones, tens and hundreds.

By writing bench mark numbers we have.

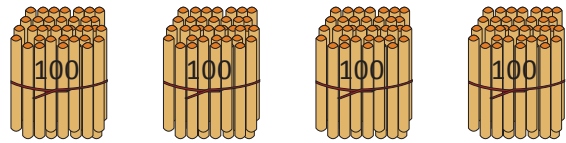
334, 335, 336, 337, 338, 339, 340, 350, 360, 370, 380, 390, 400,
500, 600, 700, 800.

Number of ones = _____



Number of tens = _____

Number of hundreds = _____




There are _____ numbers of all.

2. Show a way to count from 437 to 900 using ones, tens and hundreds.

By writing bench mark numbers we have.

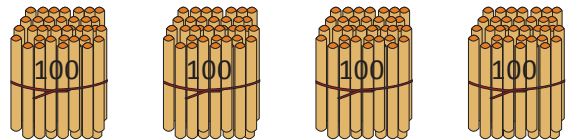
437, 438, 439, 440, 450, 460, 470, 480, 490, 500, 600, 700, 800, 900.

Number of ones = _____



Number of tens = _____

Number of hundreds = _____



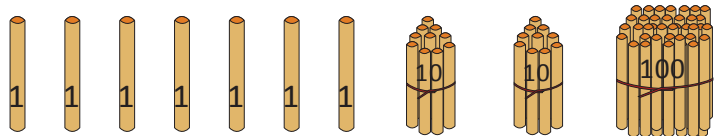
There are _____ numbers of all.

3. Show a way to count from 224 to 850 using ones, tens and hundreds.

By writing bench mark numbers we have.

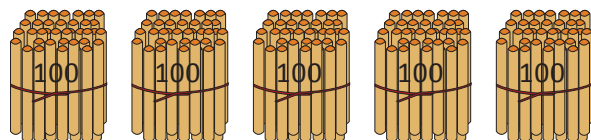
224, 225, _____, 227, _____, 229, 230, 240, _____, _____, _____, 280, 290,
300, 400, _____, 600, 700, 800, 810, 820, _____, _____, 850.

Number of ones = _____



Number of tens = 2 + 10

Number of hundreds = _____



There are _____ numbers of all.