



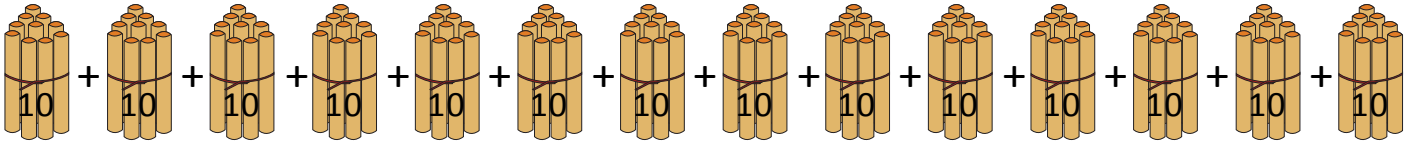
NAME _____ DATE _____

COUNT OBJECTIVES ACCORDING BUNDLES

Observe the given objectives and write correct answer for the questions given.


Example:

These are bundles with 10 sticks in each.



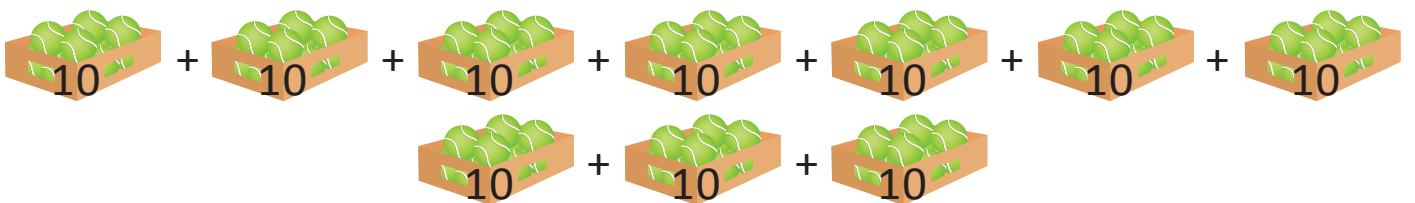
- a) How many tens are there? 14.
- b) How many hundreds? 0.
- c) How many sticks are there in all? 140.

1) These are bundles with 10 biscuits in each.



- a) How many tens are there? ____.
- b) How many hundreds? ____.
- c) How many biscuits are there? ____.

2) These are green balls having 10 in each box.



- a) How many tens are there? ____.
- b) How many hundreds? ____.
- c) How many balls are there? ____.