

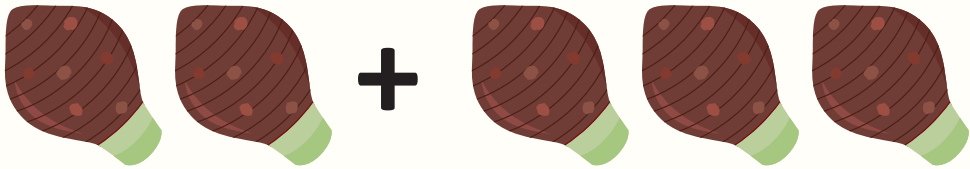







NAME \_\_\_\_\_

DATE \_\_\_\_\_

## VEGETABLE ADDITION

Find the total number of vegetable altogether in each group.

1		$\begin{array}{r} 2 \\ + 3 \\ \hline \end{array}$
2		$\begin{array}{r} 4 \\ + 1 \\ \hline \end{array}$
3		$\begin{array}{r} 3 \\ + 2 \\ \hline \end{array}$
4		$\begin{array}{r} 3 \\ + 3 \\ \hline \end{array}$
5		$\begin{array}{r} 2 \\ + 3 \\ \hline \end{array}$
6		$\begin{array}{r} 1 \\ + 3 \\ \hline \end{array}$