



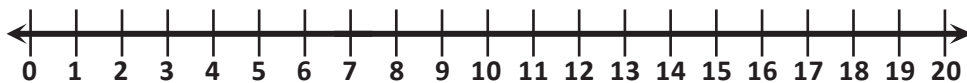
NAME \_\_\_\_\_

DATE \_\_\_\_\_

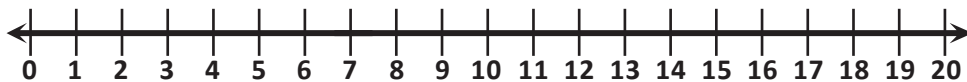
## ADDITION ON NUMBER LINE

Show each problem on number line and write the correct answer.

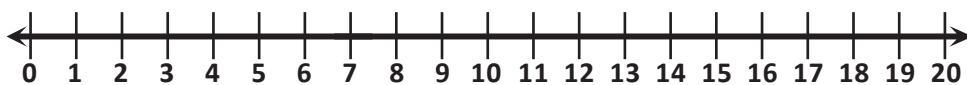
$4 + 1 =$



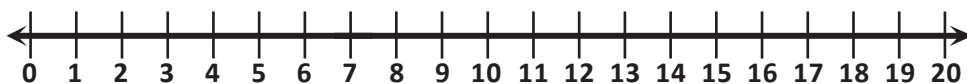
$4 + 2 =$



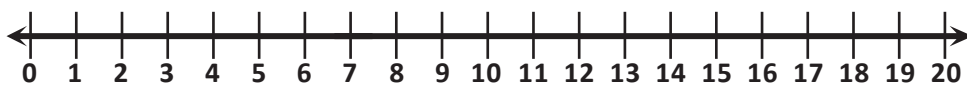
$4 + 3 =$



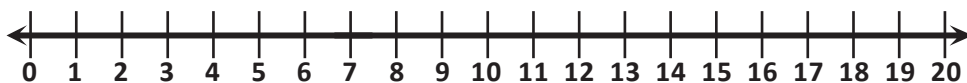
$4 + 4 =$



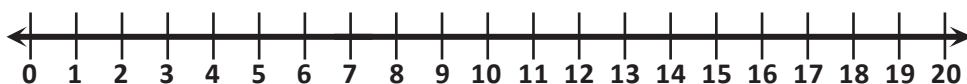
$4 + 5 =$



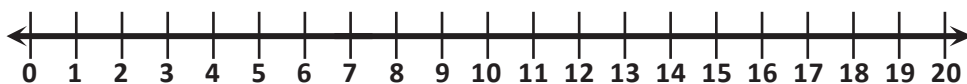
$4 + 6 =$



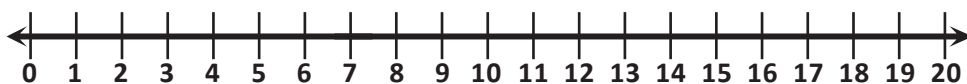
$4 + 7 =$



$4 + 8 =$



$4 + 9 =$



$4 + 10 =$

