

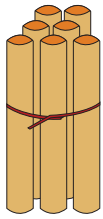


NAME _____

DATE _____

ADDITION

Count the sticks, add and write the correct number.



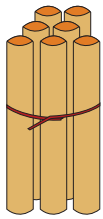
7

+



1

=



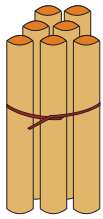
7

+



2

=



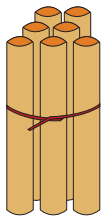
7

+



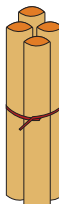
3

=



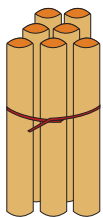
7

+



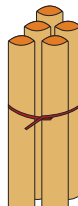
4

=



7

+



5

=