

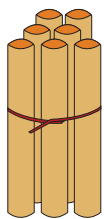


NAME _____

DATE _____

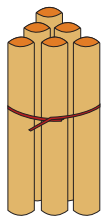
ADDITION

Count the sticks, add and write the correct number.



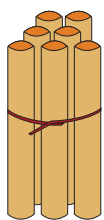
7

+



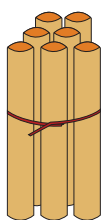
6

=



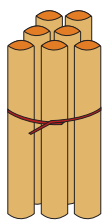
7

+



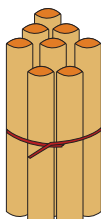
7

=



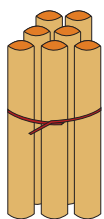
7

+



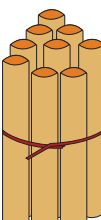
8

=



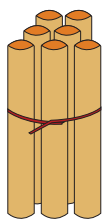
7

+



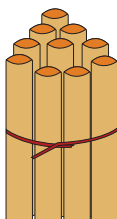
9

=



7

+



10

=