

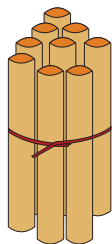


NAME \_\_\_\_\_

DATE \_\_\_\_\_

# ADDITION

Count the sticks, add and write the correct number.



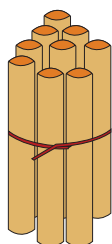
9

+



1

=



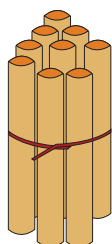
9

+



2

=



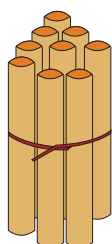
9

+



3

=



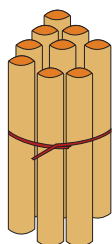
9

+



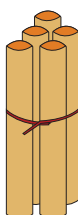
4

=



9

+



5

=