

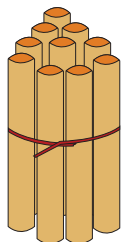


NAME _____

DATE _____

ADDITION

Count the sticks, add and write the correct number.



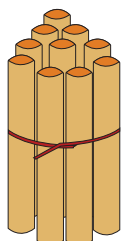
10

+



1

=



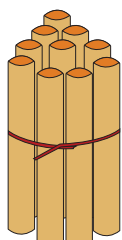
10

+



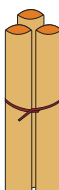
2

=



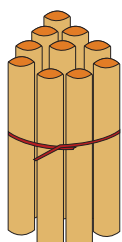
10

+



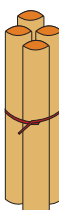
3

=



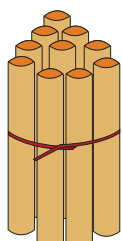
10

+



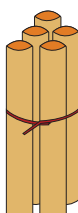
4

=



10

+



5

=