

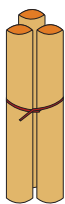


NAME _____

DATE _____

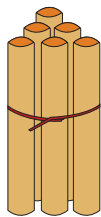
ADDITION

Count the sticks, add and write the correct number.



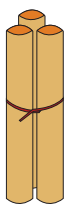
3

+



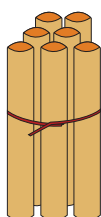
6

=



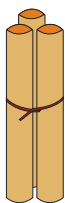
3

+



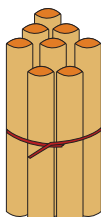
7

=



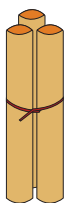
3

+



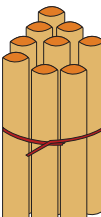
8

=



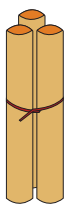
3

+



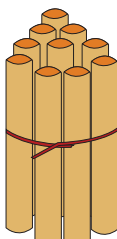
9

=



3

+



10

=