



NAME _____

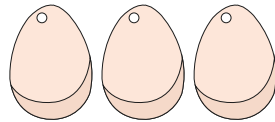

DATE _____

ADDITION

Problem solving questions.

Example:



6 eggs are in a bowl, and 3 more eggs added to the bowl. How many eggs are in the bowl?




6
3
+
9




1. 8 pens are in a row, and 2 more pens added. How many pens are there?



8
2
+





2. 7 butterflies sitting on the 7 flowers, and 2 more butterflies flying to sit on the flowers. How many butterflies are there on the all flowers?



7
2
+



3. 5 apples are in a tray, and 2 more apples added to the tray. How many apples are in the tray?



5
2
+

