




NAME \_\_\_\_\_

DATE \_\_\_\_\_

## SUBTRACTION


Count the following pictures and subtract by using take away strategy.




take away




=




$$6 - 2 =$$




take away



=




$$10 - 2 =$$



take away



=



$$9 - 3 =$$



take away



=



$$2 - 1 =$$