



NAME _____


DATE _____

SUBTRACTION


Subtract the given numbers by crossing out the objects.




$$5 - 1 = \square$$




$$3 - 2 = \square$$



$$9 - 3 = \square$$



$$7 - 4 = \square$$



$$6 - 4 = \square$$



$$2 - 1 = \square$$