



NAME _____

DATE _____

CAMPARING THE NUMBERS

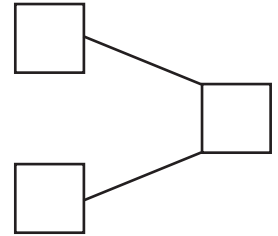
Count the objects and fill in the number bond and place value chart. Complete the sentences to add the tens and ones.

1)  $5 \times 10 = 50$

 $4 \times 1 = 4$

$50 + 4 = \underline{\quad}$

How much 54 is more than 50 ? Ans: $\underline{\quad}$.



2)  $9 \times 10 = 90$

 $8 \times 1 = 8$

$90 + 8 = \underline{\quad}$

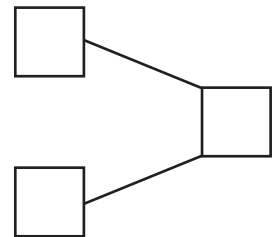
How much 98 is more than 90 ? Ans: $\underline{\quad}$.

Tens	Ones


3)  $8 \times 10 = 80$

$80 + 0 = \underline{\quad}$

How much 80 is more than 80 ? Ans: $\underline{\quad}$.



4)  $7 \times 10 = 70$

 $5 \times 1 = 5$

$70 + 5 = \underline{\quad}$

How much 75 is more than 70 ? Ans: $\underline{\quad}$.

Tens	Ones