



NAME _____

DATE _____

CAMPARING THE NUMBERS

Count the objects and fill in the number bond and place value chart. Complete the sentences to add the tens and ones.

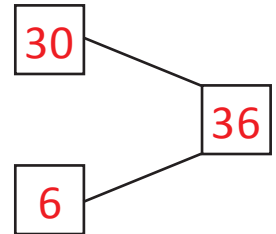
Examples:

a)  $3 \times 10 = 30$

 $6 \times 1 = 6$

$30 + 6 = \underline{36}$.

How much 36 is more than 30 ? Ans: 6.



b)  $4 \times 10 = 40$


 $5 \times 1 = 5$

$40 + 5 = \underline{45}$.

How much 45 is more than 40 ? Ans: 5.

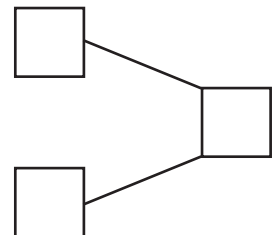
Tens	Ones
4	5

1)  $5 \times 10 = 50$

 $1 \times 1 = 1$

$50 + 1 = \underline{\quad}$.

How much 51 is more than 50 ? Ans: .



2)  $6 \times 10 = 60$

 $8 \times 1 = 8$

$60 + 8 = \underline{\quad}$.

How much 68 is more than 60 ? Ans: .

Tens	Ones