

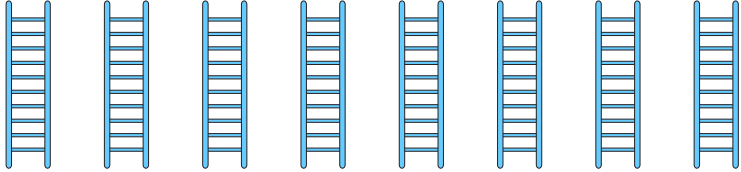
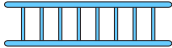


NAME _____

DATE _____

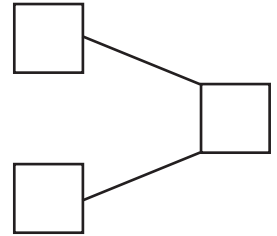
CAMPARING THE NUMBERS

Count the objects and fill in the number bond and place value chart. Complete the sentences to add the tens and ones.

1)  $8 \times 10 = 80$
 $8 \times 1 = 8$

$80 + 8 = \underline{\quad}$

How much 88 is more than 80 ? Ans: .



2)  $7 \times 10 = 70$
 $4 \times 1 = 4$

$70 + 4 = \underline{\quad}$

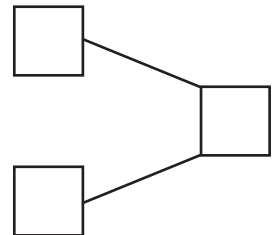
How much 74 is more than 70 ? Ans: .



Tens	Ones

3)  $5 \times 10 = 50$
 $3 \times 1 = 3$

$50 + 3 = \underline{\quad}$

How much 53 is more than 50 ? Ans: .



4)  $9 \times 10 = 90$
 $2 \times 1 = 2$

$90 + 2 = \underline{\quad}$

How much 92 is more than 90 ? Ans: .

Tens	Ones