



NAME \_\_\_\_\_

DATE \_\_\_\_\_

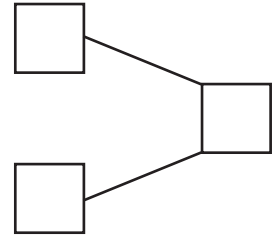
## CAMPARING THE NUMBERS



Count the objects and fill in the number bond and place value chart. Complete the sentences to add the tens and ones.

1)   $4 \times 10 = 40$   
  $9 \times 1 = 9$

$40 + 9 = \underline{\quad}$

How much 49 is more than 40 ? Ans:  $\underline{\quad}$ .





2)   $7 \times 10 = 70$   
  $6 \times 1 = 6$

$70 + 6 = \underline{\quad}$

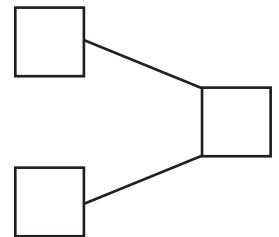
How much 76 is more than 70 ? Ans:  $\underline{\quad}$ .

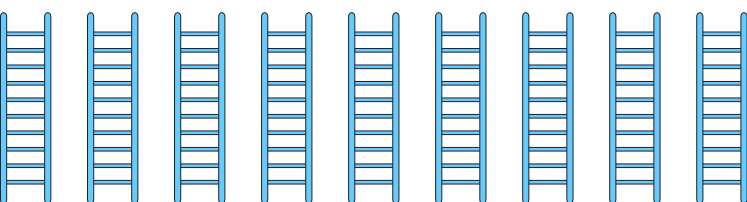
Tens	Ones

3)   $4 \times 10 = 40$   
  $7 \times 1 = 7$

$40 + 7 = \underline{\quad}$

How much 47 is more than 40 ? Ans:  $\underline{\quad}$ .



4)   $9 \times 10 = 90$

$90 + 0 = \underline{\quad}$

How much 90 is more than 90 ? Ans:  $\underline{\quad}$ .

Tens	Ones