



NAME _____


DATE _____

COMPARING NUMBERS

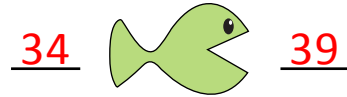
Write the number in the blanks so that the fish is eating the greater number.

Examples:


i) 20 5



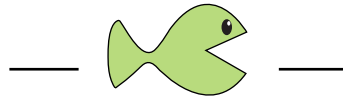
ii) 39 34




a) 22 10



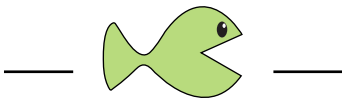
b) 35 32




c) 21 22




d) 23 32




e) 31 13




f) 26 13




g) 27 14



h) 33 29



i) 16 22



j) 12 34



k) 24 39



l) 17 33

