




NAME _____

DATE _____


COMPARING NUMBERS

Write the number in the blanks so that the fish is eating the greater number.


a) 16 25



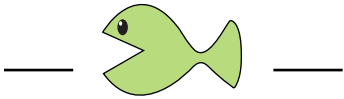
b) 24 17



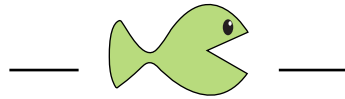
c) 16 8




d) 23 40




e) 29 18



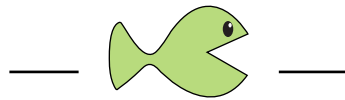
f) 12 28




g) 19 21



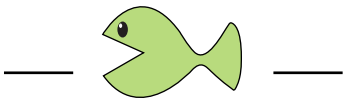
h) 14 4




i) 28 27




j) 31 41




k) 23 27



l) 16 4



m) 29 39



n) 26 13



o) 32 30

