



NAME _____

DATE _____

COUNTING

Draw quick tens and ones to show each number. Label the first drawing as less than, greater than or equal to the second drawing. Write a phrase from the word bank to compare the numbers.



Word Bank:

is greater than

is less than



is equal to

1)





40 _____ 23

2)





37 _____ 33

3)





42 _____ 42

4)





53 _____ 41

5)



26 _____ 34

6)



37 _____ 35