



NAME _____

DATE _____

CAMPARING THE NUMBERS

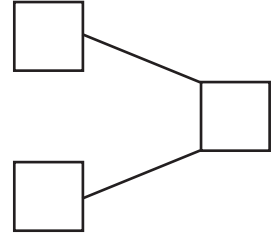
Count the objects and fill in the number bond and place value chart. Complete the sentences to add the tens and ones.

1)  $7 \times 10 = 70$

 $2 \times 10 = 20$

$70 + 0 = \underline{\quad}$

How much 70 is more than 70 ? Ans: .



2)  $8 \times 10 = 80$

 $6 \times 1 = 6$

$80 + 6 = \underline{\quad}$

How much 86 is more than 80 ? Ans: .

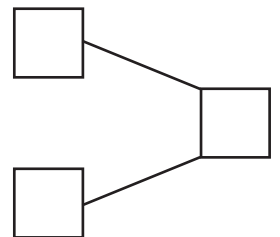
Tens	Ones


3)  $9 \times 10 = 90$


 $5 \times 1 = 5$

$90 + 5 = \underline{\quad}$

How much 95 is more than 90 ? Ans: .



4)  $4 \times 10 = 40$

 $2 \times 1 = 2$

$40 + 2 = \underline{\quad}$

How much 42 is more than 40 ? Ans: .

Tens	Ones