

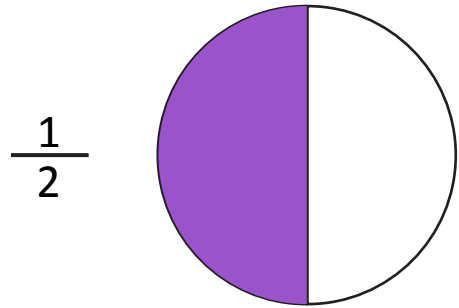
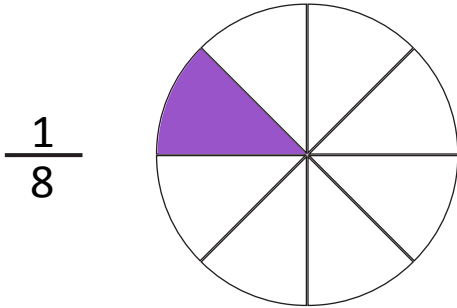


NAME \_\_\_\_\_ DATE \_\_\_\_\_

## COMPARE FRACTIONS

Tick (✓) on the correct answer.

1. Which fraction is greater?





$\frac{1}{2}$

$\frac{1}{8}$

neither, they are equal.

2. Which fraction is less?


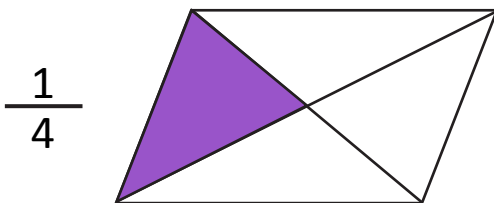


$\frac{1}{4}$

$\frac{1}{8}$

neither, they are equal.

3. Which fraction is greater?



$\frac{1}{4}$

$\frac{3}{4}$

neither, they are equal.