



NAME _____

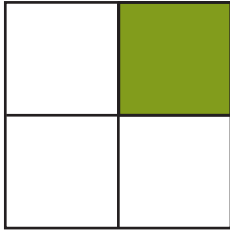
DATE _____

SIMPLE FRACTIONS

What fraction does the shape show?

Example:

What fraction of the shape is green?



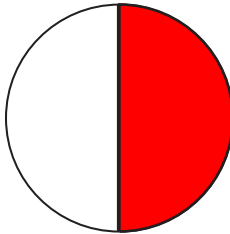
$\frac{1}{5}$

$\frac{1}{3}$

$\frac{1}{4}$

$\frac{1}{2}$

1. What fraction of the shape is red?




$\frac{1}{3}$

$\frac{1}{2}$

$\frac{1}{4}$

$\frac{1}{5}$

2. What fraction of the shape is orange?




$\frac{1}{2}$

$\frac{1}{3}$

$\frac{1}{4}$

$\frac{1}{5}$

3. What fraction of the shape is blue?



$\frac{1}{2}$

$\frac{1}{3}$

$\frac{1}{4}$

$\frac{1}{5}$