




NAME _____

DATE _____

SYMMETRY

What part of the shape is shaded? Circle the correct answer.


Example:



1 half

1 quarter

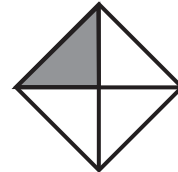
1)



1 half

1 quarter

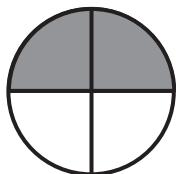
2)



1 half

1 quarter

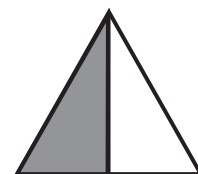
3)



1 half

1 quarter


4)



1 half

1 quarter

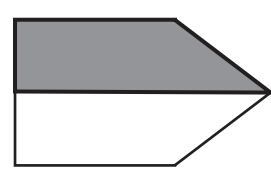
5)



1 half

1 quarter

6)



1 half

1 quarter