

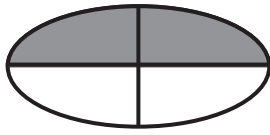


NAME _____ DATE _____

SYMMETRY


What part of the shape is shaded? Circle the correct answer.

1)



1 half 1 quarter

2)



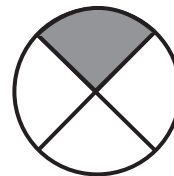
1 half 1 quarter

3)



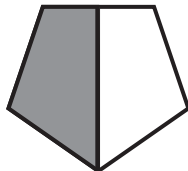
1 half 1 quarter

4)



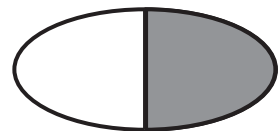
1 half 1 quarter

5)



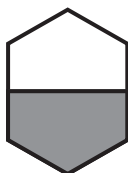
1 half 1 quarter

6)



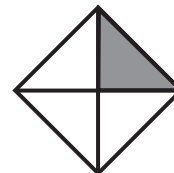
1 half 1 quarter

7)



1 half 1 quarter

8)



1 half 1 quarter