



NAME _____

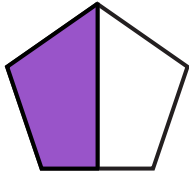
DATE _____

SYMMETRY

Color part of the shape to match its label. Circle the phrase that would make the statement true.

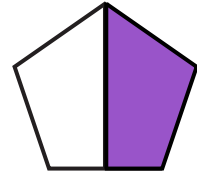
1)

One half of pentagon.



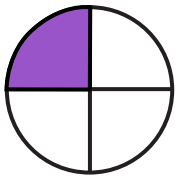
Is bigger than.
Is smaller than.
Is the same size as.

One half of pentagon.



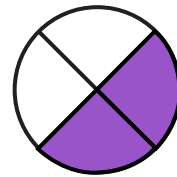
2)

One fourth of circle.



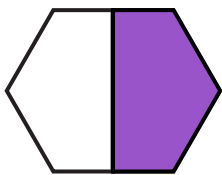
Is bigger than.
Is smaller than.
Is the same size as.

half of circle.



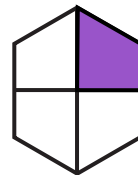
3)

One half of the hexagon.



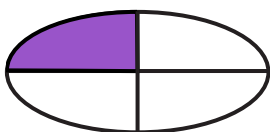
Is bigger than.
Is smaller than.
Is the same size as.

One fourth of the hexagon.



4)

One quarter of oval.



Is bigger than.
Is smaller than.
Is the same size as.

One quarter of oval.

