



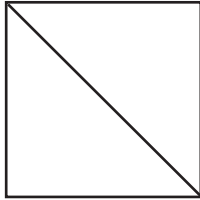
NAME _____

DATE _____

SYMMETRY

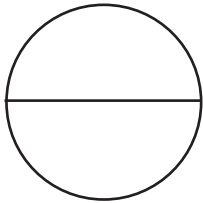
Are the shapes divided into equal parts? Write yes (Y) or no (N). If the shape has equal parts, write how many equal parts on the line.

Example:



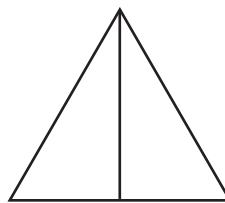
Y 2

1)



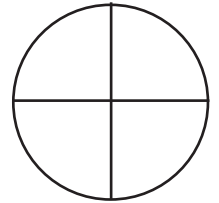
— —

2)



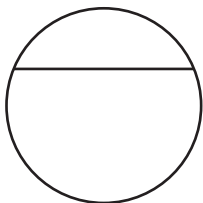
— —

3)




— —

4)



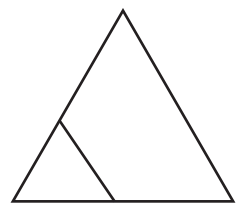
— —

5)



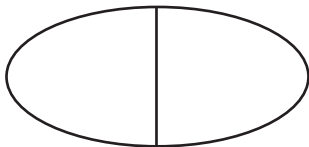
— —

6)




— —

7)



— —

8)



— —

9)



— —