



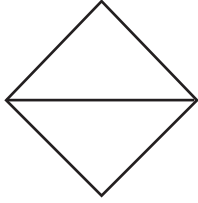
NAME _____

DATE _____

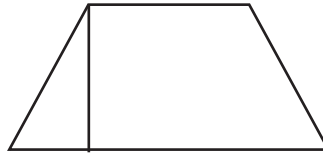
SYMMETRY

Are the shapes divided into equal parts? Write yes (Y) or no (N). If the shape has equal parts, write how many equal parts on the line.

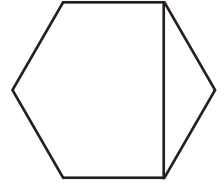
1)



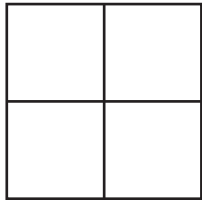
2)



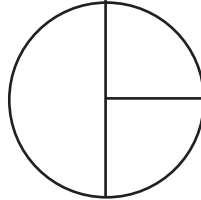
3)



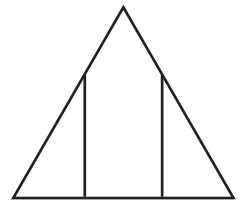
4)



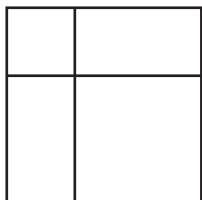
5)



6)



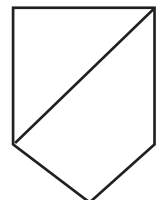
7)



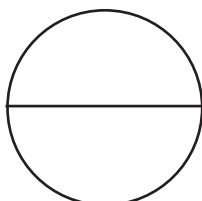
8)



9)



10)



11)



12)

