




NAME _____

DATE _____

SYMMETRY

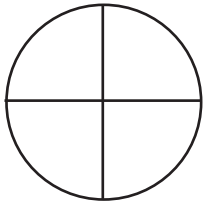
Write the number of equal parts in each shape.

Example:



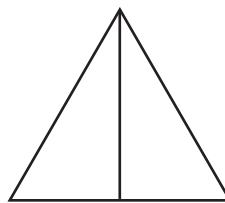
2

1)



—

2)



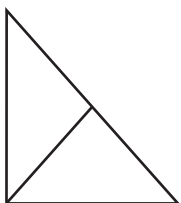
—

3)



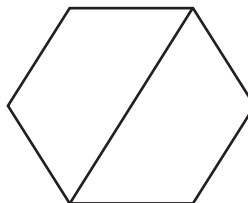
—

4)



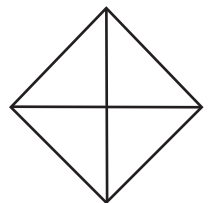
—

5)




—

6)



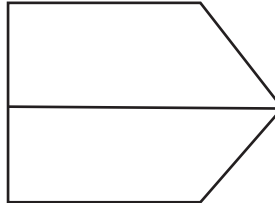
—

7)




—

8)



—

9)



—