



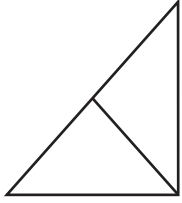
NAME \_\_\_\_\_

DATE \_\_\_\_\_

# SYMMETRY

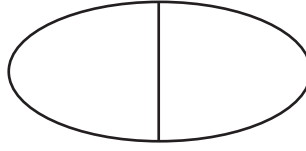
Write the number of equal parts in each shape.

1)



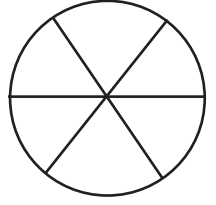
—

2)



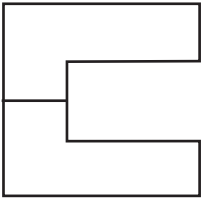
—

3)



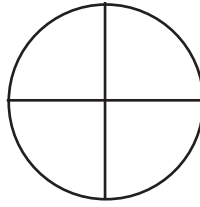
—

4)



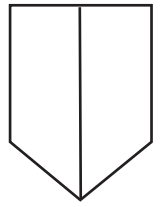
—

5)



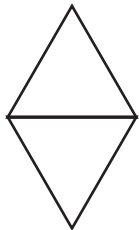
—

6)



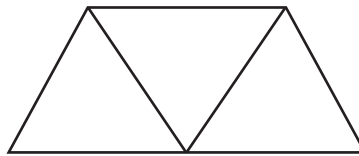
—

7)




—

8)



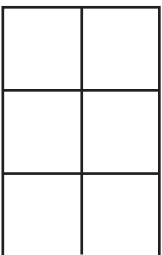
—

9)



—

10)



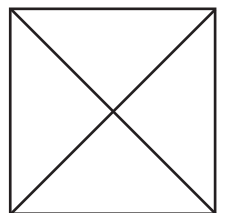
—

11)



—

12)



—