



NAME _____

DATE _____

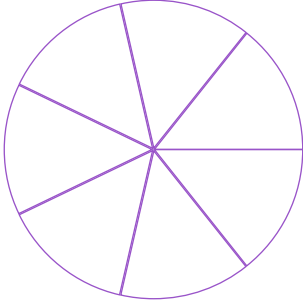
FRACTIONS : WORD PROBLEMS

Tick (✓) on the correct answer.


Example:

Which fraction is greater?

$\frac{1}{7}$



$\frac{1}{6}$



$\frac{1}{7}$

$\frac{1}{6}$

 neither, they are equal.

1. Which fraction is less?

$\frac{1}{8}$



$\frac{1}{8}$



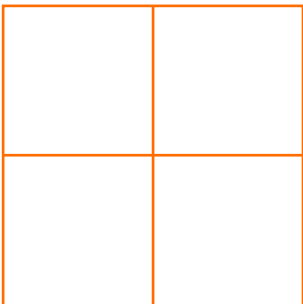
$\frac{1}{8}$

$\frac{1}{8}$

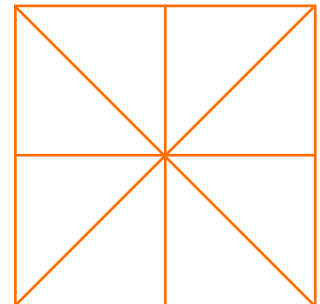
 neither, they are equal.

2. Which fraction is greater?

$\frac{1}{4}$



$\frac{1}{8}$



$\frac{1}{4}$

$\frac{1}{8}$

 neither, they are equal.