



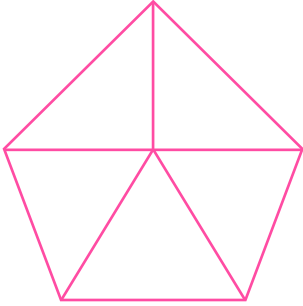
NAME \_\_\_\_\_ DATE \_\_\_\_\_

## FRACTIONS : WORD PROBLEMS

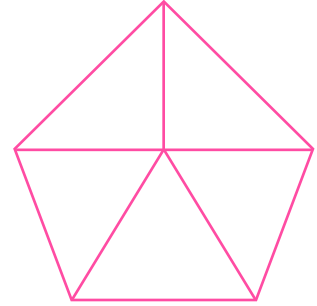
Tick (✓) on the correct answer.

1. Which fraction is less?

$\frac{1}{5}$



$\frac{1}{5}$



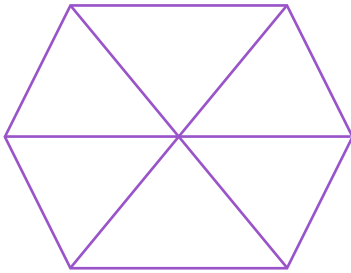
$\frac{1}{5}$

$\frac{1}{5}$

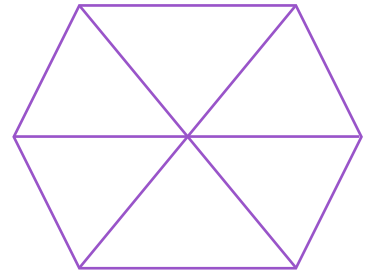
 neither, they are equal.

2. Which fraction is greater?

$\frac{1}{6}$



$\frac{1}{6}$



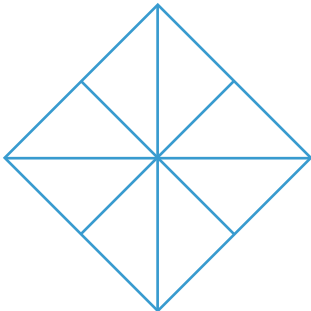
$\frac{1}{6}$

$\frac{1}{6}$

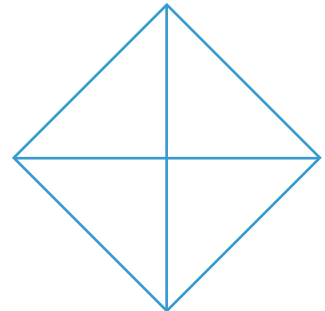
 neither, they are equal.

3. Which fraction is less?

$\frac{1}{8}$



$\frac{1}{4}$



$\frac{1}{8}$

$\frac{1}{4}$

 neither, they are equal.