




NAME \_\_\_\_\_

DATE \_\_\_\_\_

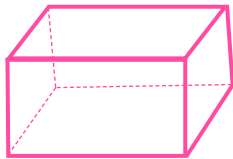
## COUNT EDGES, CORNERS AND FACES

Tick (✓) on the correct answer.


1. How many faces does this figure have?

 4 6 5 2

2. How many edges does this figure have?

 4 3 2 12

3. How many edges does this figure have?

 4 0 2 5

4. How many corners does this figure have?

 4 3 2 5

5. How many faces does this figure have?

 7 3 2 5