



NAME _____ DATE _____

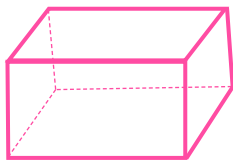
COUNT EDGES, CORNERS AND FACES

Tick (✓) on the correct answer.

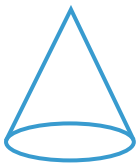
1. How many faces does this figure have?

 4 6 5 2


2. How many faces does this figure have?

 4 3 6 5


3. How many faces does this figure have?

 4 3 2 5

4. How many faces does this figure have?

 4 3 2 5

5. How many corners does this figure have?

 4 3 2 0