

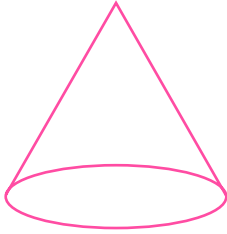


NAME _____ DATE _____

COUNT EDGES, CORNERS AND FACES

Understanding the mathematical terminology and concepts in 3D shapes.

1) How many faces does this figure have?

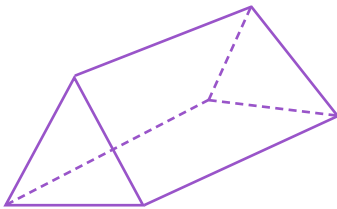


2

3

1

2) How many vertices does this figure have?




5

6

7

3) How many faces does this figure have?



0

1

2

4) How many vertices does this figure have?



7

8

9