

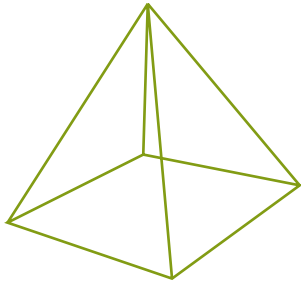


NAME \_\_\_\_\_ DATE \_\_\_\_\_

## FACES, EDGES AND VERTICES

Write the name of each shape. Also find the number of faces, edges and vertices.

1)



\_\_\_ faces.

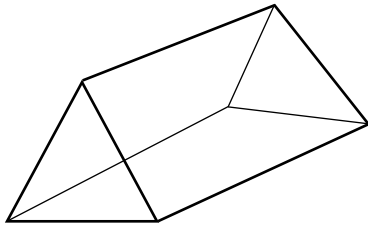
\_\_\_ edges.

\_\_\_ vertices.

Name: \_\_\_\_\_

---

2)



\_\_\_ faces.

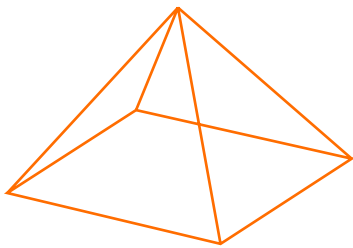
\_\_\_ edges.

\_\_\_ vertices.

Name: \_\_\_\_\_

---

3)



\_\_\_ faces.

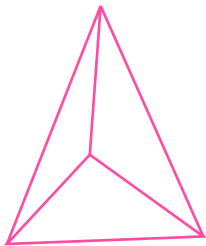
\_\_\_ edges.

\_\_\_ vertices.

Name: \_\_\_\_\_

---

4)



\_\_\_ faces.

\_\_\_ edges.

\_\_\_ vertices.

Name: \_\_\_\_\_